



**Yuvashakti Model School**  
— इतिहासम् अतः इतिहासम् —

**Class-III**

**Winter Holiday  
Homework**

**WINTER HOLIDAY HOMEWORK**  
**SAMPLE PAPER**  
**CLASS III**  
**ENGLISH**

Time: 2 Hrs

M.M: 60

Name: \_\_\_\_\_ Section: \_\_\_\_\_ Roll no.: \_\_\_\_\_

**Section A (Reading)**

Q-1 Read the below passage carefully and answer the following questions.

5

Riya has a beautiful garden behind her house, filled with colorful flowers and green plants. She spends an hour every morning taking care of it. Roses, lilies, sunflowers, and marigolds bloom in her garden throughout the year. She waters the plants, removes weeds, and sometimes adds manure to the soil. The garden also has a small pond with goldfish swimming inside. Birds like sparrows and pigeons often visit her garden and sit on the branches of the trees. Riya's favorite flower is the sunflower because it always faces the sun, and it makes her feel happy and cheerful.

a) Where does Riya spend her mornings?

\_\_\_\_\_

b) Name four flowers that bloom in Riya's Garden.

\_\_\_\_\_

c) What animals can be found in the small pond in Riya's Garden?

\_\_\_\_\_

d) What does Riya do to take care of her garden?

\_\_\_\_\_

e) Write the opposite of the word "small" from the passage.

\_\_\_\_\_

Q-2 Read the below passage carefully and answer the following questions.

5

Aman lives near a big park that is full of life and activity. The park has a large playground, a walking track, and many tall trees that provide shade. Every evening, children gather to play games like cricket, badminton, and hide-and-seek. Aman enjoys sitting on a bench and watching the birds fly around the park. He often brings snacks to feed the birds, who chirp happily as they eat. The park also has a fountain in the center, where visitors sit to relax and enjoy the cool breeze. Aman loves the peaceful environment and the chirping sounds of birds, which make him feel calm and happy.

a) What does the park near Aman's house have?

---

b) What games do children play in the park?

---

c) Where is the fountain located in the park?

---

d) What does Aman do while sitting on the bench in the park?

---

e) Write the opposite of the word "big" from the passage.

---

### Section B (Writing)


Q-3 Write a paragraph on the topic "My First Day at School".

5

---

---

---



---

---

---

---

---

---

---

---

---

---

Q-4 Complete the following informal letter with suitable words.

5

124, Green Street, Delhi  
December 2, 2024

Dear \_\_\_\_\_,

I hope you are doing well. I am so excited to invite you to my birthday party. This year, I will be turning \_\_\_\_\_years old. The party will be held at my house on \_\_\_\_\_at \_\_\_\_\_p.m.

There will be games, food, and lots of fun activities. I really hope you can make it and celebrate with us.

I can't wait to see you.

Yours lovingly

\_\_\_\_\_



## Section C (Grammar)

Q-5 Underline the adverbs in the sentences:

2

- a) She sings beautifully.
- b) They will arrive soon.

Q-6 Fill in the blanks with the correct prepositions:

3

- a) The books are kept \_\_\_\_\_ the table.
- b) We went \_\_\_\_\_ the bridge to reach the village.
- c) The ball rolled \_\_\_\_\_ the sofa.

Q-7 Combine the sentences using suitable conjunctions

3

- a) I like ice cream. I like chocolate.

\_\_\_\_\_

- b) He was tired. He kept working.

\_\_\_\_\_

- c) She will come to the party. She is feeling better.

\_\_\_\_\_

Q-8 Fill in the blanks with appropriate interjections:

2

- a) \_\_\_\_\_! You did an amazing job.
- b) \_\_\_\_\_! The vase just broke.

Q-9 Tick the correct preposition:

2

- a) He is sitting (on/in) the chair.
- b) The train will arrive (at/on) 5 PM.

Q-10 Match the sentences in Column A with their adverb types in Column B.

**A**  
(Sentence)

**B**  
(Type of adverb)

- |  |                      |
|--|----------------------|
| 1. She danced gracefully at the party. | a) Adverb of Manner. |
| 2. We will visit the park tomorrow.    | b) Adverb of Time    |
| 3. The children are playing outside.   | c) Adverb of Place   |

### Section D (Literature)

Q-11 Read the statements below and write "True" or "False" for each  
5

- a) Alice opened the smallest door. \_\_\_\_\_
- b) As she ate the cake, she became very tiny. \_\_\_\_\_
- c) The poet compared the group of children to butterflies. \_\_\_\_\_
- d) Alice followed the rabbit because she was bored. \_\_\_\_\_
- e) The cat lost its balance and fell off the broomstick. \_\_\_\_\_

Q-12 Fill in the blanks with the correct words from the story 2

- a) The witch was crying because her \_\_\_\_\_ was broken.
- b) Thirteen o'clock happens once in a \_\_\_\_\_.

Q-13 His cart might be a flower bed,  
Of roses and sweet peas,  
The way the children cluster round  
As thick as honeybees. 3

- a) Name the poem.

\_\_\_\_\_

- b) Name the poet.

\_\_\_\_\_



c) Write the opposite of the word "thin" from the passage.

\_\_\_\_\_

Q-14 Write the meaning of the following words

4

a) Astonished \_\_\_\_\_

b) Cluster \_\_\_\_\_

c) Tumbled off \_\_\_\_\_

d) Petrified \_\_\_\_\_

Q-15 Answer the following questions in 1-2 sentences. (Any 4)

8

a) Why was the witch crying?

\_\_\_\_\_

b) Why did Twinkle run away?

\_\_\_\_\_

c) What are the two things that the ice cream man sells?

\_\_\_\_\_

d) Why were the pixies alarmed?

\_\_\_\_\_

e) What sight did Sandy find amazing?

\_\_\_\_\_

Q-16 Answer the below question in 3-4 sentences.

3

a) What happened to Alice when she ate the cake?

\_\_\_\_\_

\_\_\_\_\_

\_\_\_\_\_

प्रतिदर्श प्रश्न पत्र (2024-25)

तीसरी  
हिंदी

समय - 2 घंटे

पूर्णांक -60

नाम \_\_\_\_\_

वर्ग \_\_\_\_\_

अनुक्रमांक \_\_\_\_\_

सामान्य निर्देश:- 1) सभी प्रश्न अनिवार्य हैं।

2) उत्तर सुंदर व स्पष्ट शब्दों में लिखें।

खंड- क

प्रश्न.1 नीचे दिए गए गद्यांश को पढ़कर प्रश्नों के उत्तर लिखिए।

5

एक तालाब में बहुत से कछुए रहते थे। एक बार उस तालाब के किनारे कुछ बच्चे खेलने आए। उनमें से एक लड़का जिसका नाम रोहन था। वह बहुत शरारती था। खेलते-खेलते रोहन कछुओं को पत्थर मारने लगा। जिससे कई कछुए घायल हो गए। हर्ष एक समझदार बच्चा था। जब उसने रोहन को कछुओं को पत्थर मारते देखा तो उसने उसे मना किया। उसने उसे समझाया कि जानवरों को मारना व सताना बुरी बात है।

1) कछुए कहाँ रहते थे?

उत्तर \_\_\_\_\_

2) तालाब के किनारे कौन खेलने आया?

उत्तर \_\_\_\_\_

3) रोहन कैसा बच्चा था?

उत्तर \_\_\_\_\_

4) पत्थर मारने से कौन घायल हो गया?

उत्तर \_\_\_\_\_

5) हर्ष ने रोहन को क्या समझाया?

उत्तर \_\_\_\_\_



प्रश्न.2 नीचे दिए गए वाक्यों में विशेषण शब्दों को रेखांकित करें।

3

1) वह बहुत सुंदर है।

2) रोहन लंबा लड़का है।

3) पानी ठंडा है।

प्रश्न.3 दिए गए वाक्य से क्रिया शब्द छाँट कर लिखिए।

3

क) बच्चा खेल रहा है। \_\_\_\_\_

ख) राधा माला बना रही है। \_\_\_\_\_

ग) पिताजी अखबार पढ़ रहे हैं। \_\_\_\_\_

प्रश्न.4 दिए गए शब्दों के विलोम शब्द लिखो।

2

(क) आदि - \_\_\_\_\_

(ख) स्वर्ग - \_\_\_\_\_

(ग) मित्र - \_\_\_\_\_

(घ) वीर - \_\_\_\_\_

प्रश्न.5 दिए गए शब्दों को शुद्ध करके लिखिए।

2

(क) कवित्री - \_\_\_\_\_

(ख) कीताब - \_\_\_\_\_

(ग) पुरुसकार - \_\_\_\_\_

(घ) गुरु- \_\_\_\_\_

प्रश्न.6 निम्नलिखित प्रश्नों के उत्तर लिखो।

6

(क) विशेषण किसे कहते हैं?

उत्तर \_\_\_\_\_

(ख) किन्हीं दो प्राकृतिक क्रियाओं के नाम बताओ।

उत्तर \_\_\_\_\_

(ग) विलोम शब्द किसे कहते हैं?

उत्तर \_\_\_\_\_

प्रश्न.7 निम्नलिखित शब्दों की सहायता से कहानी पूरी करो।

4

( एक शेर , खेलने, सहायता , शिकारी , बिछाया , काट दिया , आज्ञा , साथियों के )

एक जंगल में \_\_\_\_\_ सो रहा था। तभी एक चूहा वहाँ \_\_\_\_\_ आया, वह शेर

के ऊपर खेलने लगा। शेर ने उसे पकड़ लिया और कहा - " मैं तुम्हें खा जाऊँगा।" चूहे

ने कहा - " तुम मुझे छोड़ दो, समय आने पर मैं तुम्हारी \_\_\_\_\_ करूँगा। शेर

ने उसे छोड़ दिया। एक दिन जंगल में एक \_\_\_\_\_ आया। उसने जाल

\_\_\_\_\_। शेर उसमें फँस गया। चूहे को जब पता चला तो वह अपने \_\_\_\_\_ साथ

वहाँ गया। चूहे ने जाल को \_\_\_\_\_, और शेर \_\_\_\_\_ हो गया।

प्रश्न 8 उचित शब्दों की सहायता से पत्र को पूरा करो ।

5

तिलकनगर

नई दिल्ली ( 110018)

दिनांक - \_\_\_\_\_

प्रिय मित्र \_\_\_\_\_

नमस्कार।

तुम्हें यह जानकर बहुत खुशी होगी कि इस बार भी मेरा \_\_\_\_\_ बहुत धूमधाम से मनाया जा रहा है। इसमें सभी मित्र और रिश्तेदार उपस्थित रहेंगे। सांस्कृतिक कार्यक्रम और खाने का भी प्रबंध किया गया है। मेरा निवेदन है कि \_\_\_\_\_ को सायं 5:00 बजे तुम मेरे घर अवश्य आना। तुम्हारी प्रतीक्षा रहेगी।

चाचा जी और चाचा जी से मेरा \_\_\_\_\_।

तुम्हारी/तुम्हारा मित्र

\_\_\_\_\_

खंड - ख

प्रश्न.9 नीचे दिए गए शब्दों का अर्थ लिखिए।

4

1) कतार - \_\_\_\_\_

2) त्योहार- \_\_\_\_\_

3) छकाकर - \_\_\_\_\_

4) लख - \_\_\_\_\_

प्रश्न.10 नीचे लिखे वाक्यों पर सही ( ✓ ) या गलत ( × ) का चिह्न लगाइए।

3

1) अंकित कुंभ का मेला देखने गया था। ( )

2) माइकल फैराडे परिश्रमी बालक था। ( )

3) बच्चे अध्यापिका जी के साथ पिकनिक पर गए थे। ( )

प्रश्न.11 सही विकल्प पर सही ( ✓ ) का चिह्न लगाइए।

4

(क) ईशान किस प्रकार का लड़का था ?

1) शैतान

2) समझदार

3) धोखेबाज

(ख) कविता में दिवाली पर घर किस से सजाते हैं?

- 1) मूर्तियों से
- 2) दीपों से
- 3) केले के पत्तों से

(ग) अंकित कहाँ रहता है?

- 1) दिल्ली
- 2) मुंबई
- 3) आगरा

(घ) पाठ के आधार पर बताओ कि मशीनें किस से चलती हैं?

- 1) पेट्रोल से
- 2) बिजली की चुंबक से
- 3) डीजल से

प्रश्न 12 सही शब्द चुनकर खाली स्थान भरो ।

3

( आइस क्रीम , अनोखी , संतोष )

क) सबके मुख पर \_\_\_\_\_ का भाव था।

ख) वहाँ मैंने \_\_\_\_\_ खाई ।

ग) मेले में पुस्तकों की \_\_\_\_\_ दुनिया देखकर मुझे अच्छा लगा ।

प्रश्न.13 एक शब्द में उत्तर दीजिए।

4

1) ऑलपिन के सिर पर क्या नहीं होता?

उत्तर \_\_\_\_\_

2) सुराही का गला कैसा होता है?

उत्तर \_\_\_\_\_

3) मेला कहाँ लगा था ?

उत्तर \_\_\_\_\_

4) दिवाली को किसका त्यौहार कहते हैं?

उत्तर \_\_\_\_\_

5) सर हम्फ्रे डेवी ने माइकल की किस तरह मदद की?

उत्तर - \_\_\_\_\_

प्रश्न.14 निम्नलिखित प्रश्नों के उत्तर लिखिए।

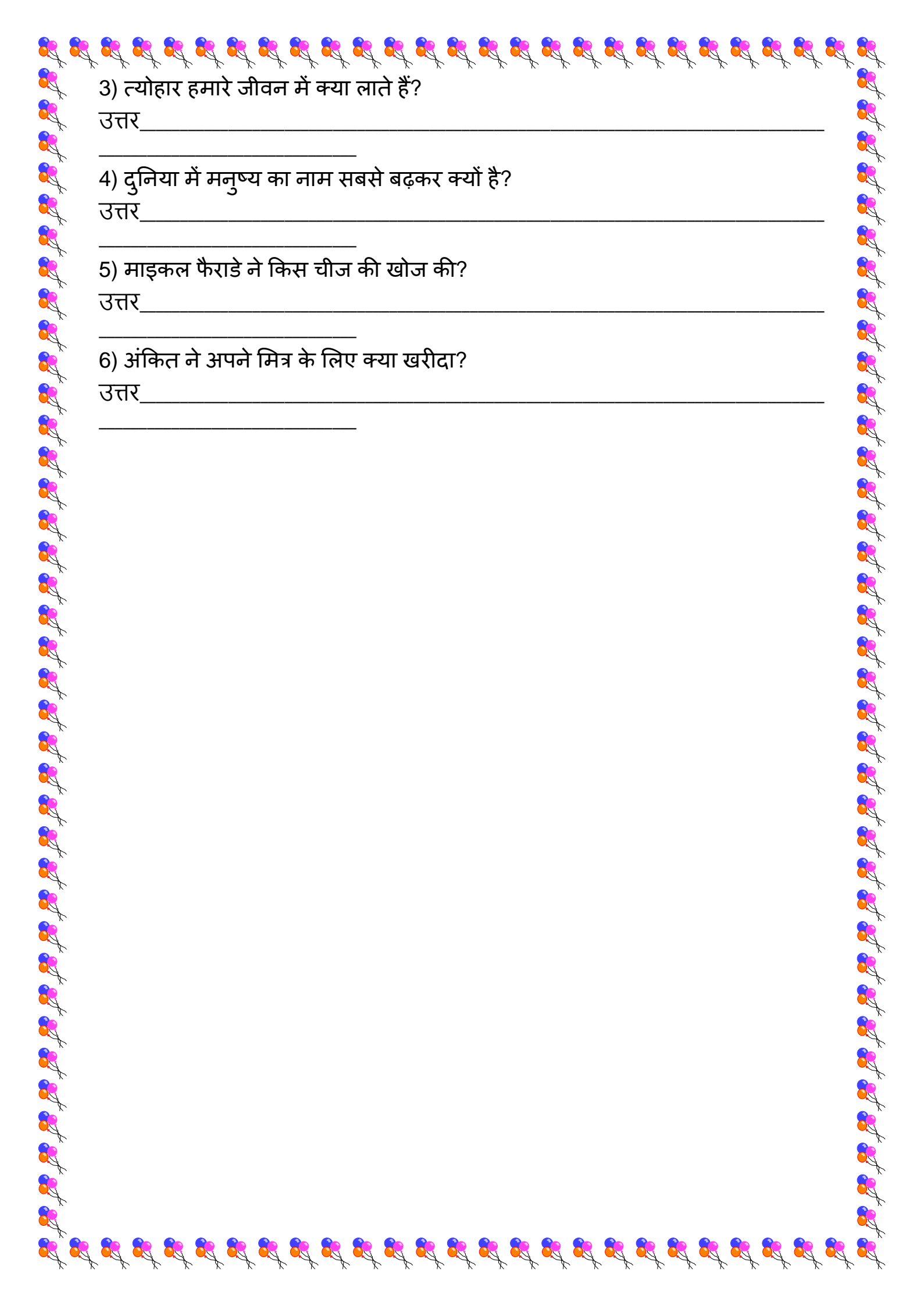
12

1) अंकित ने अपने लिए कौन सी पुस्तक खरीदी?

उत्तर \_\_\_\_\_

2) बच्चों के मुख पर संतोष का भाव क्यों था?

उत्तर \_\_\_\_\_



3) त्योहार हमारे जीवन में क्या लाते हैं?

उत्तर \_\_\_\_\_

4) दुनिया में मनुष्य का नाम सबसे बढ़कर क्यों है?

उत्तर \_\_\_\_\_

5) माइकल फैराडे ने किस चीज की खोज की?

उत्तर \_\_\_\_\_

6) अंकित ने अपने मित्र के लिए क्या खरीदा?

उत्तर \_\_\_\_\_

**SAMPLE PAPER**  
**CLASS III**  
**MATHEMATICS**

NAME: \_\_\_\_\_ SEC: \_\_\_\_\_ ROLL NO.: \_\_\_\_\_

TIME: 2 hrs

MM:60

**General Instructions:**

- Attempt all questions.
- Do your paper neatly.

**SECTION-A**

**(1X10=10)**

Multiple choice questions

i. ₹ 2= \_\_\_\_\_

- a) 200 p      b) 20 p      c) 2000p

ii. 4000p= ₹ \_\_\_\_\_

- a) 40      b) 4      c) 400

iii. 2 days = \_\_\_\_\_ hours

- a) 48      b) 98      c) 24

iv. 6 hours= \_\_\_\_\_ minutes

- a) 60      b) 360      c) 160

v. 3m 10cm= \_\_\_\_\_

- a) 310 cm      b) 410 cm      c) 301 cm

vi. 2 km= \_\_\_\_\_ m

- a) 20      b) 2000      c) 200

vii.  $856 \div 8 =$  \_\_\_\_\_

- a) 107 g      b) 207g      c) 17g

viii. 2000g= \_\_\_\_\_

- a) 2 kg      b) 2mg      c) 2g

ix.  $40 \text{ L} \times 7 =$  \_\_\_\_\_

- a) 290 L      b) 280 L      c) 320 L

x. 4kg rice + 6kg Sugar + 80kg Wheat. Total = \_\_\_\_\_

- a) 90kg      b) 100kg      c) 180 kg

SECTION-B

(2x19=38)

$$\begin{array}{r} \text{₹} \qquad \qquad \text{p} \\ 36 \quad . \quad 45 \\ \times 8 \\ \hline \end{array}$$

3. ₹ 27.55 + ₹ 432.88 + ₹ 4287

---

---

---


---

4. Write the time as shown: -



a)

---



b)

---

5. Write these dates in the order in which they come in the year:-

15 August (Independence day) \_\_\_\_\_

2 October (Gandhi Jayanti) \_\_\_\_\_

26 January (Republic Day) \_\_\_\_\_

5 September (Teacher's Day) \_\_\_\_\_

14 November (Children's day) \_\_\_\_\_

6. Change:- 8 days to hours.

---

---

---

---



7. Change into kilometres and metres: -

a) 8000 m=

---

---

---

---

b) 4080 m=

---

---

---

---

8. 42m 51cm – 27m 17cm

---

---

---

---

9. 906 km 48m ÷ 3

---

---

---

---

---

---

---

---

---

---

---

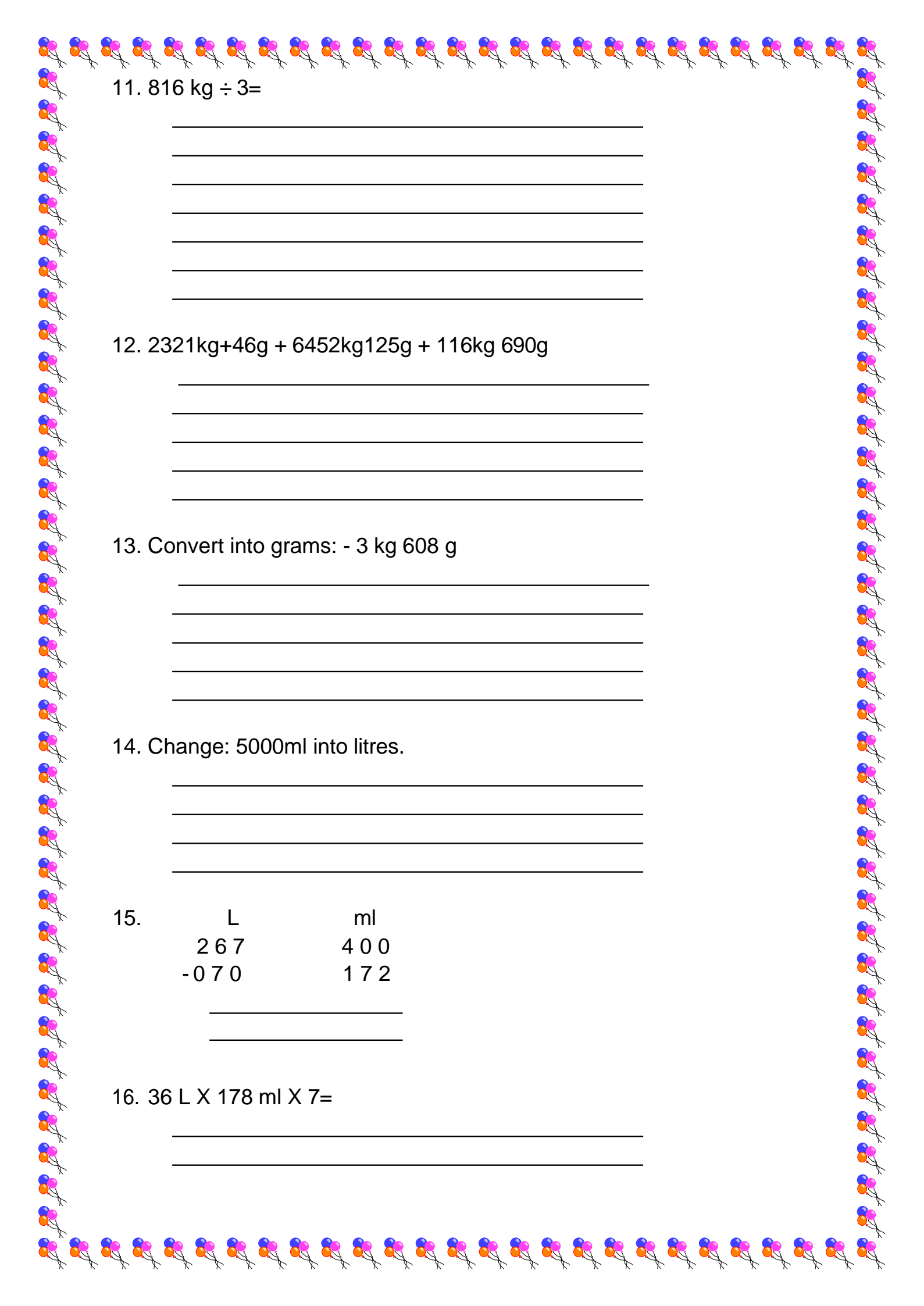
---

10. 568 kg X 9=

---

---

---



11.  $816 \text{ kg} \div 3 =$

---

---

---

---

---

---

12.  $2321 \text{ kg} + 46 \text{ g} + 6452 \text{ kg} + 125 \text{ g} + 116 \text{ kg} + 690 \text{ g}$

---

---

---

---

---

13. Convert into grams: -  $3 \text{ kg } 608 \text{ g}$

---

---

---

---

---

14. Change:  $5000 \text{ ml}$  into litres.

---

---

---

---

15.

L	ml
267	400
-070	172

---

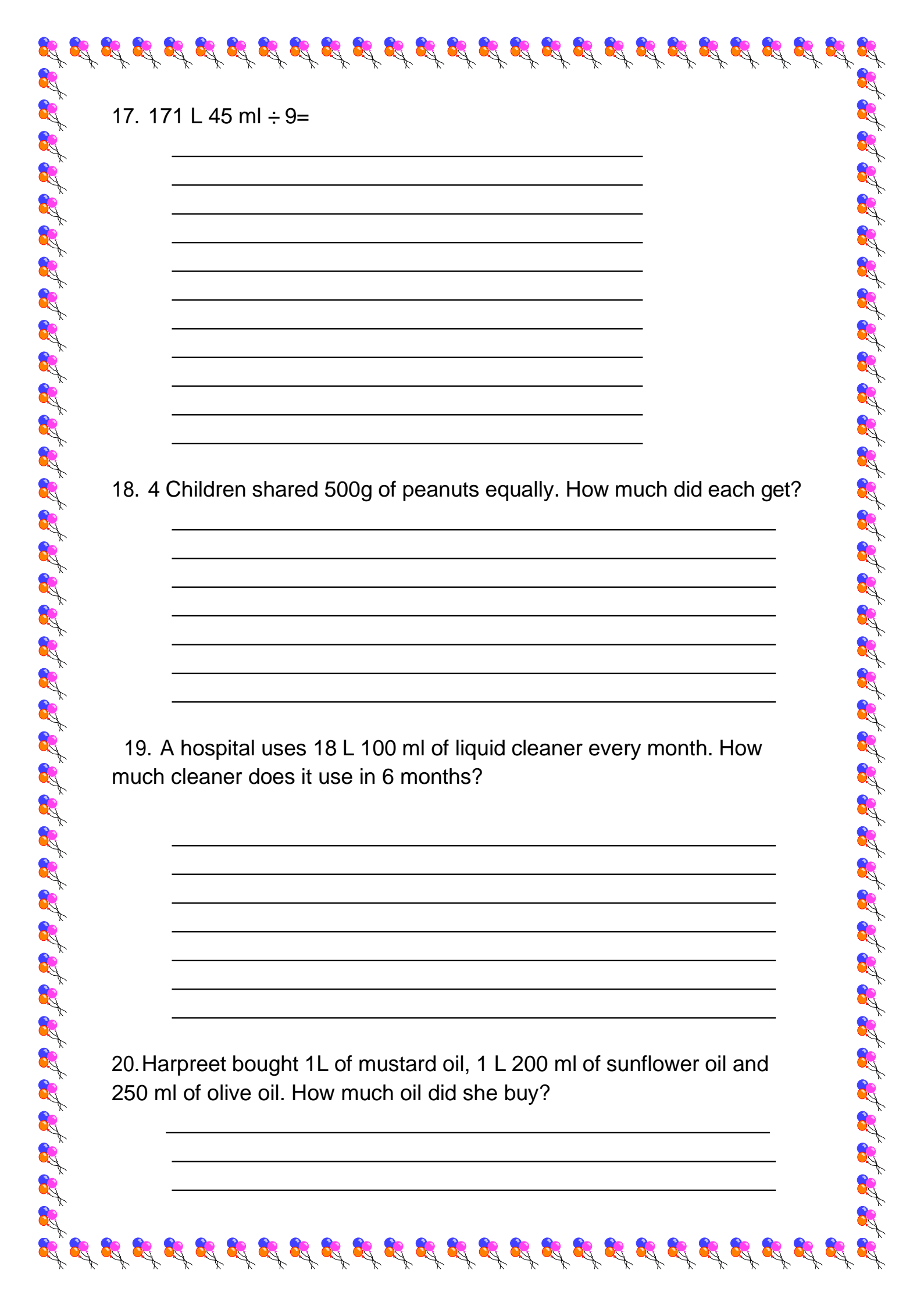
---

16.  $36 \text{ L} \times 178 \text{ ml} \times 7 =$

---

---





17.  $171\text{ L } 45\text{ ml} \div 9 =$

---

---

---

---

---

---

---

---

---

---

18. 4 Children shared 500g of peanuts equally. How much did each get?

---

---

---

---

---

---

---

19. A hospital uses 18 L 100 ml of liquid cleaner every month. How much cleaner does it use in 6 months?

---

---

---

---

---

---

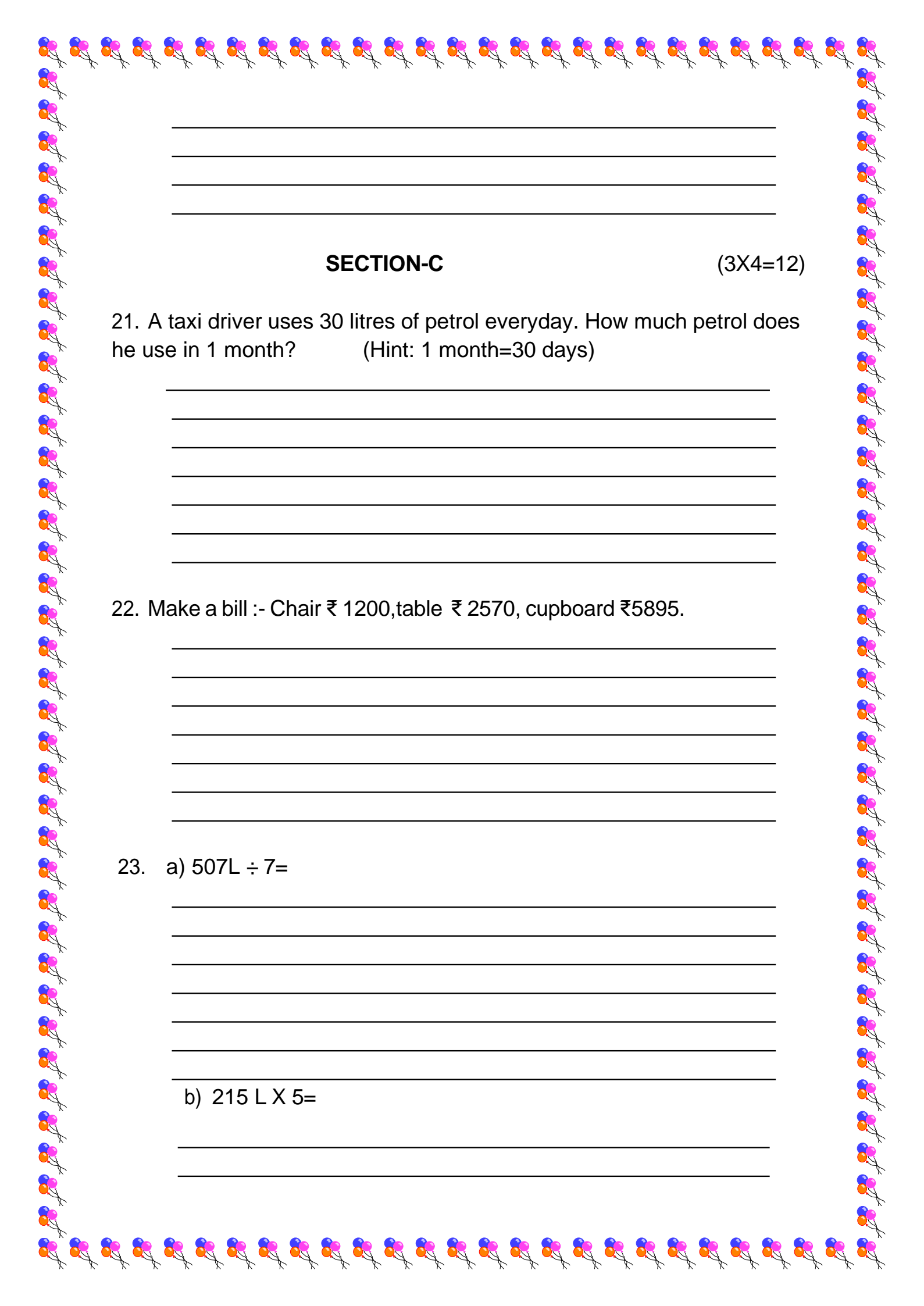
---

20. Harpreet bought 1L of mustard oil, 1 L 200 ml of sunflower oil and 250 ml of olive oil. How much oil did she buy?

---

---

---



---

---

---

---

**SECTION-C**

(3X4=12)

21. A taxi driver uses 30 litres of petrol everyday. How much petrol does he use in 1 month? (Hint: 1 month=30 days)

---

---

---

---

---

---

---

22. Make a bill :- Chair ₹ 1200, table ₹ 2570, cupboard ₹5895.

---

---

---

---

---

---

---

23. a)  $507L \div 7 =$

---

---

---

---

---

---

---

b)  $215 L \times 5 =$

---

---



**SAMPLE PAPER**  
**CLASS-III**  
**EVS**

Time:2Hrs

MM-60

Name..... Section..... Roll no. ....

**SECTION-A**

Q.1) Tick the correct option:- (1x10=10)

- A) Jana Gana Mana is our.....  
(i) national song                      (ii) national emblem                      (iii) national anthem
- B) Many offices are situated in .....  
(i) cities                                      (ii) villages                                      (iii) forests
- C)..... is the capital of west Bengal.  
(i) Gurugram                                      (ii) Kolkata                                      (iii) Mumbai
- D) It is huge fire ball:  
(i) Earth                                      (ii) Sun                                      (iii) Moon
- E) The vehicle which can move on water is the.....  
(i) Steamer                                      (ii) Car                                      (iii) Train
- F) If we need to listen to old speeches, we use a.....  
(i) Magazine                                      (ii) Radio                                      (iii) Newspaper
- G) It is a pattern of stars in the sky:  
(i) Sirius                                      (ii) Constellation                                      (iii) Solar system
- H)..... are extracted from the rock.  
(i) Water                                      (ii) Soil                                      (iii) Minerals
- I) Burning garbage and smoke of vehicles can cause.....  
(i) air pollution                                      (ii) water pollution                                      (iii) sewage
- J) Jama Masjid is situated in .....  
(i) Mumbai                                      (ii) Delhi                                      (iii) Chennai

Q.2) Fill in the blanks with the words given in the box:- (1x8= 8)

- A) National flag is adopted from .....
- B) We need to paste a..... on the envelope.
- C) Artificial..... Help send message and information quickly across the world through signal.
- D) The day when we see the full moon is called .....

- E) Wildlife lives in .....
- F) Different ..... makes different soil.
- G) There are ..... planets in the solar system.
- H) No other flag can be placed above the .....

Q.3) State True or False:- (0.5x8= 4)

- A) Mumbai is the commercial capital of India. ( )
- B) Diamond Harbour is an important port in Chennai. ( )
- C) The Earth revolves around the Jupiter. ( )
- D) Our ancestors used latest vehicles for travelling. ( )
- E) There is more land on Earth than water. ( )
- F) India is very rich in natural resources. ( )
- G) Air transport is the oldest means of transport. ( )
- H) All central government offices are located in New Delhi. ( )

Q.4) Write the full forms of the following:- (1x3= 3)

- A) SMS :- .....
- B) PCO :- .....
- C) E-mail :- .....

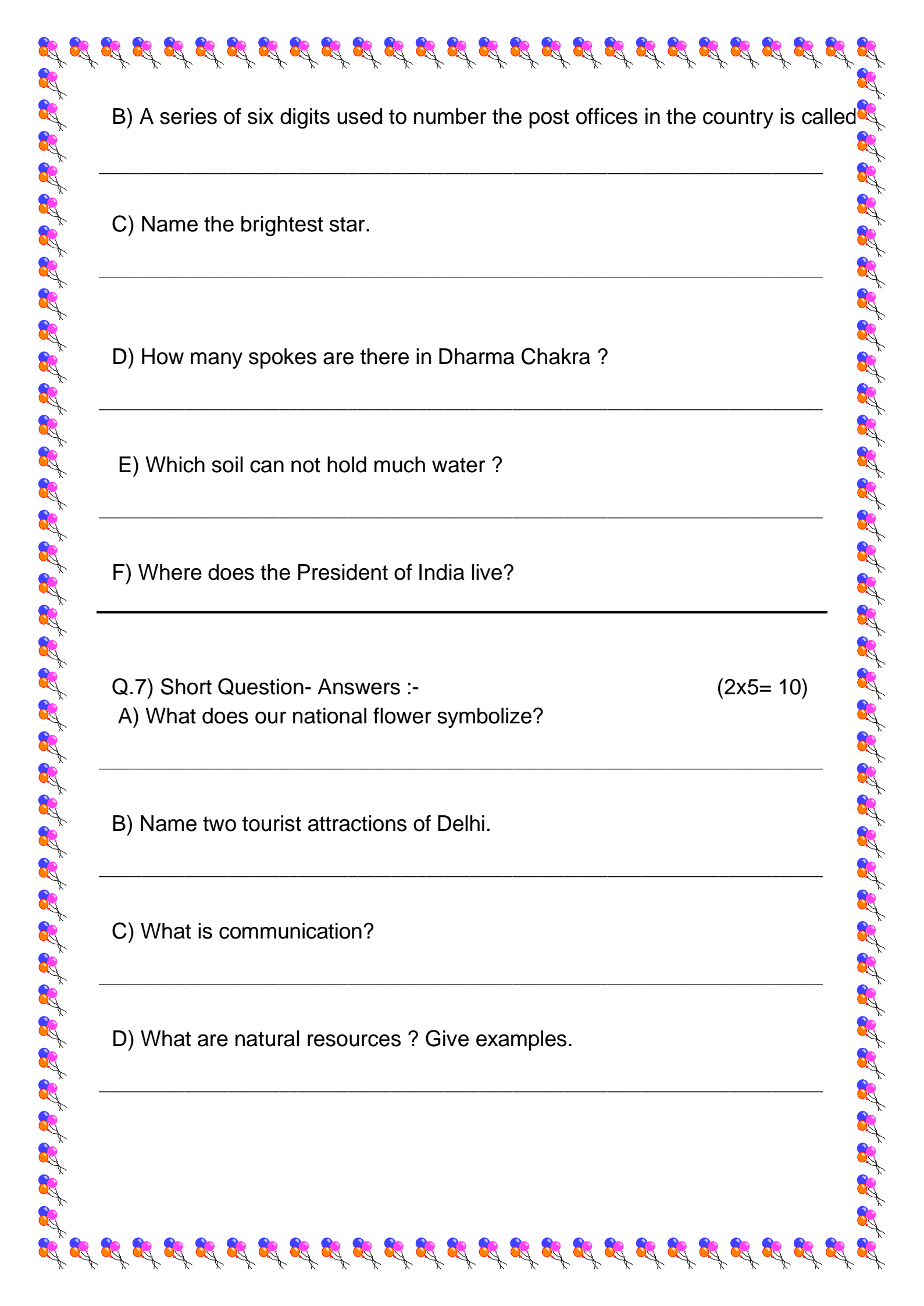
Q.5) Match the following:- (1x5= 5)

- |                 |                    |
|-----------------|--------------------|
| A) Peacock      | (i) National song  |
| B) Fort William | (ii) Topmost layer |
| C) Vande Matram | (iii) Kolkata      |
| D) Soil         | (iv) National bird |
| E) Water        | (v) Irrigation     |

### SECTION-B

Q.6) Very short Question-Answers :- (1x6= 6)

- A) Name the busiest airport in India.
-



B) A series of six digits used to number the post offices in the country is called

---

C) Name the brightest star.

---

D) How many spokes are there in Dharma Chakra ?

---

E) Which soil can not hold much water ?

---

F) Where does the President of India live?

---

Q.7) Short Question- Answers :-

(2x5= 10)

A) What does our national flower symbolize?

---

B) Name two tourist attractions of Delhi.

---

C) What is communication?

---

D) What are natural resources ? Give examples.

---



E) Why is Earth called a 'special planet' ?

---

---

---

Q.8) Long Question-Answers (Do any three) :-

(3x3= 9)

A) Write some advantages of living in villages.

---

---

---

---

B) Describe our national flag.

---

---

---

---

C) What are satellites? How are they different from the stars?

---

---

---

---

D) Name the different means of transports with examples.

---

---

---

---


E) Write three functions of forests.

---

---

---

---



Q.9) Do the following: -

(2.5x2= 5)

A) Draw the diagram of solar system and label them.

B) Draw any two national symbols.