



Yuvashakti Model School
— इकोइहा आर इणइकरोति

Class-II
Winter Holiday
Homework

**WINTER HOLIDAYS HOMEWORK
SAMPLE PAPER
CLASS – II
ENGLISH**

TIME: 2 Hrs.

M.M: 60

NAME SEC ROLL NO.....

SECTION-A

(READING)

Q.1 Read the passage carefully and answer the following questions: -

Aarti is Manu's best friend. She is getting ready to go to Manu's birthday party in the evening. She bought a big book of stories as a birthday gift for Manu. Aarti wants to wrap it in red color Paper. She knows that red is Manu's favorite color. She can't find any red paper. Aarti is sad. Looking at Aarti's sad face her mother told her to Wrap the gift in her red scarf! Aarti was delighted.

Tick (✓) the right option: -

(5)

(I) Who is Manu's best friend?

(a) Aarti (b) Seema (c) Pooja (d) Preeti

(II) Where is Aarti going in the evening?

(a) hospital (b) school (c) birthday Party (d) home

(III) What gift Aarti has for Manu?

(a) Story book (b) toy (c) clothes (d) fairy

(IV) Which is Manu's Favorite colour?

(a) Green (b) Red (c) Yellow (d) White

(V) Write the opposite word of father -----

Q.2 Read the passage carefully and answer the following questions: -(5)

Anna's favorite hobby is playing lute. She spends a lot of her free time playing lute. She started learning to play the lute when she was five years old. She played in her school's band. Anna's dad bought her a lute and she started practicing every day after school. It was very loud, but her mother never complained. She improved a lot, and playing lute has been her favorite hobby ever since.

1) What is Anna's favorite hobby?

2) When did Anna start to play the lute?

3) Who bought Anna a lute?

4) What is the title of the story?


5) Where did Anna perform the lute?

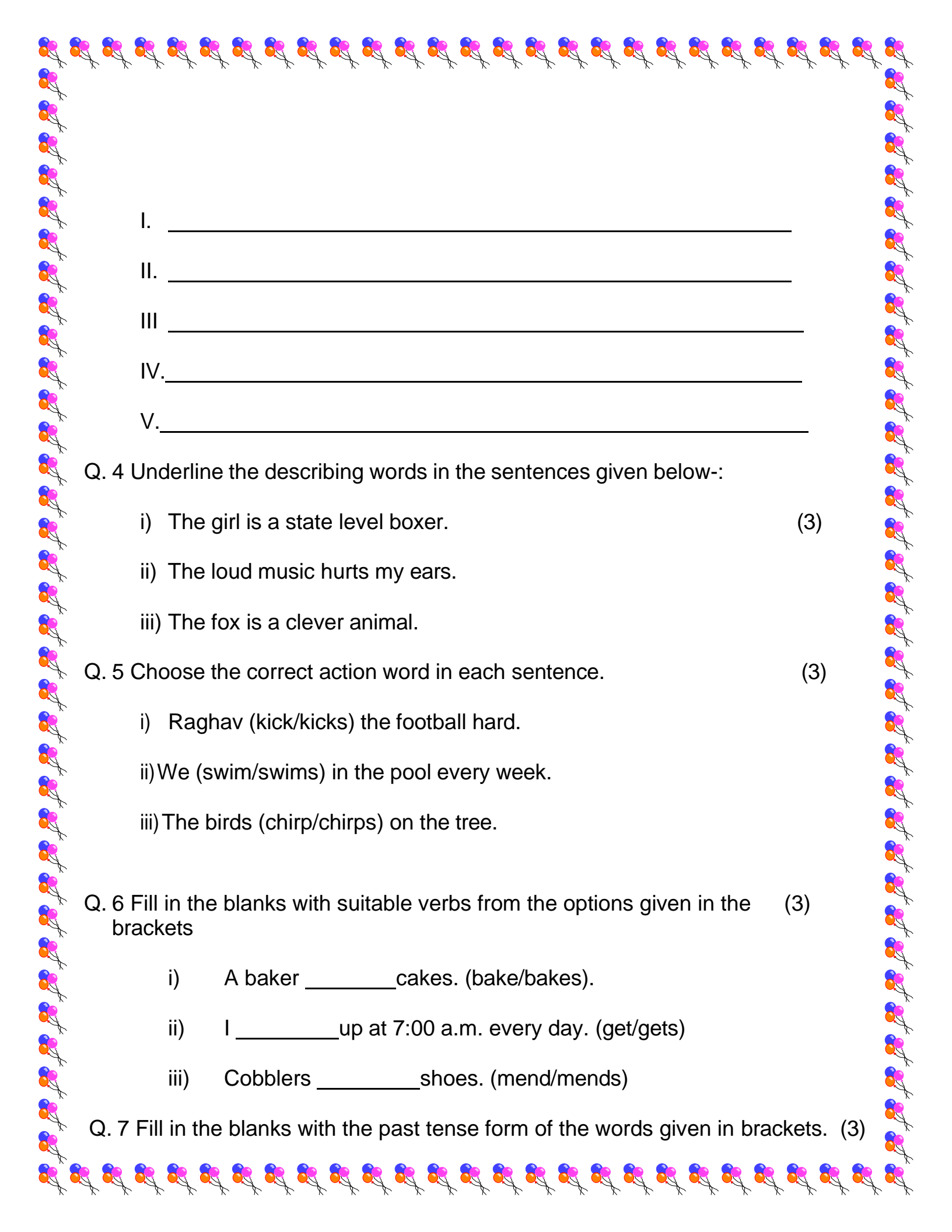
SECTION-B

(WRITING & GRAMMAR)

Q. 3 Write a story on 'Two friends.

(5)



- 
- I. _____
- II. _____
- III. _____
- IV. _____
- V. _____

Q. 4 Underline the describing words in the sentences given below:-

- i) The girl is a state level boxer. (3)
- ii) The loud music hurts my ears.
- iii) The fox is a clever animal.

Q. 5 Choose the correct action word in each sentence. (3)

- i) Raghav (kick/kicks) the football hard.
- ii) We (swim/swims) in the pool every week.
- iii) The birds (chirp/chirps) on the tree.

Q. 6 Fill in the blanks with suitable verbs from the options given in the brackets (3)

- i) A baker _____ cakes. (bake/bakes).
- ii) I _____ up at 7:00 a.m. every day. (get/gets)
- iii) Cobblers _____ shoes. (mend/mends)

Q. 7 Fill in the blanks with the past tense form of the words given in brackets. (3)

ii) Yesterday, we _____ wet in the rain.(get)

iii) I _____ pizza yesterday. (eat)

Q. 8 Fill in the blanks with suitable verbs from the options given in the brackets (3)

iv) A baker _____ cakes. (bake/bakes).

v) I _____ up at 7:00 a.m. every day. (get/gets)

vi) Cobblers _____ shoes. (mend/mends)

Q. 9 Fill in the blanks with the past tense form of the words given in brackets. (3)

vii) They _____ properly.(study)

viii) _____ Yesterday, we wet in the rain.(get)

ix) I _____ pizza yesterday. (eat)

Q. 10 Join the sentences using and/but/or. (3)

i) The tea is hot. The coffee is cold.

ii) Ravi will dance. Lina will dance.

iii) I want a pencil. I want an eraser.

SECTION-C (MCB)

Q. 11 Write the meaning of the following words:- (4)

i) Seek-

iii) Brother-

ii) Wand-

iv) Cunning-

Q. 12 Tick the correct option in each case.

(5)

i) Where was the bunny sleeping?

(a) under a bush

(b) by a tree

(b) under a tree

(d) in a house

ii) Who ate all the animals?

(a) tiger

(b) jackal

(c) fox

(d) lion

iii) What did the monkey get?

(a) magic tree (b) magic wand (c) magic stone (d) magic paper

iv) Who came to Jinia in the garden?

(a) bird

(b) snake

(c) fairy

(d) ant

v) Who was the first animal to follow bunny?

(a) pigeon

(b) duck

(c) hen

(d) fox

Q. 13 Answer the following questions: -

(5)

i) What was the deer doing?

ii) How do the roots grow?

iii) What was the bunny dreaming about?

iv) Who was living inside the cave?

V)What was the bunny doing?

Q. 14 Answer the following questions: - (6)

i) Why did the bunny start running?

ii) What does little monkey want to be?

iii) What did the giraffe use his long neck for?

Q. 15 Fill in the blanks with suitable words:- (5)

smoke	dams	upset	waste	protector
-------	------	-------	-------	-----------

i) Her mother was _____ with her behavior.

ii) Jinia saw the _____ bird.

iii) Electricity is made from _____.

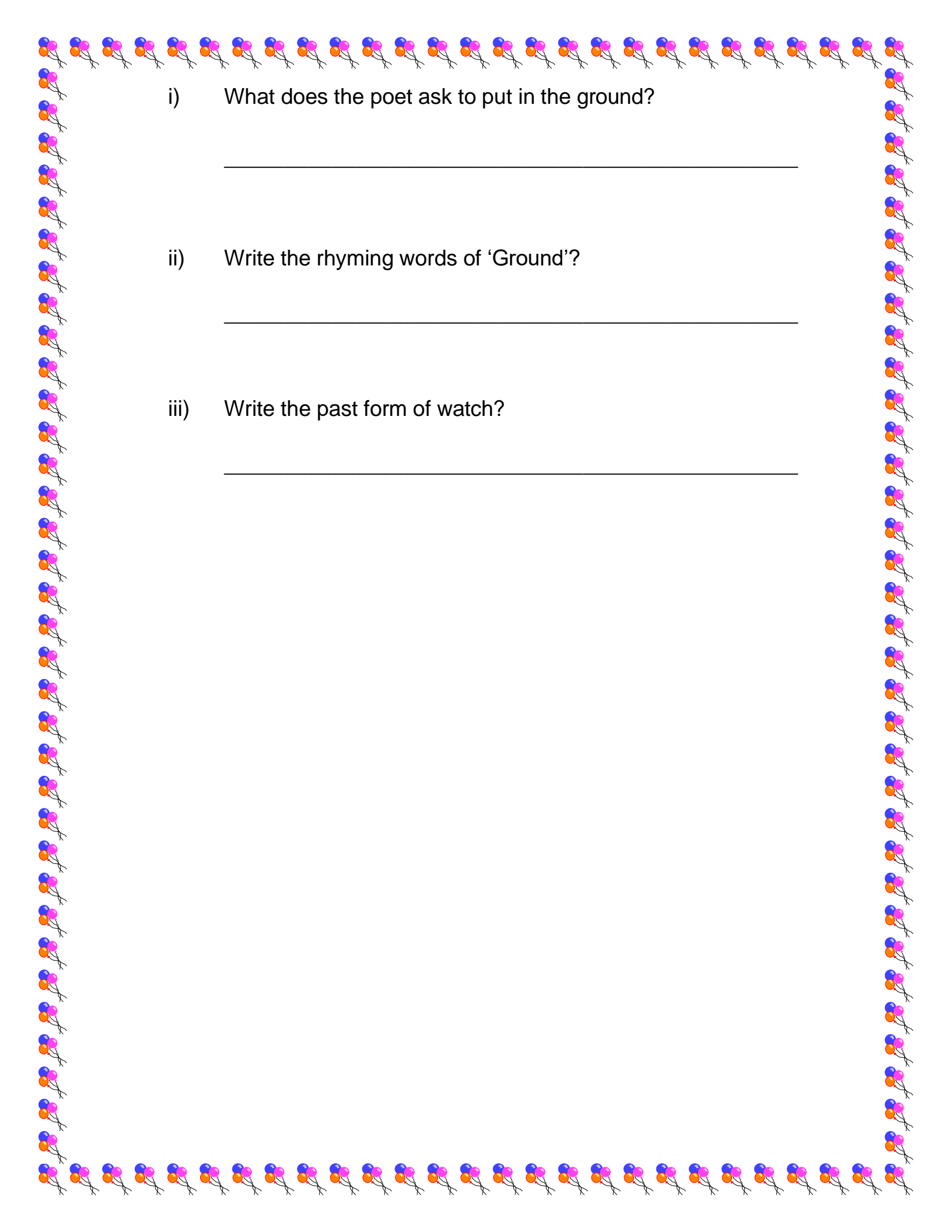
iv) They were covered in a cloud of _____.

v) We _____ electricity and water.

Q. 16 Read the passage and answer the following questions:- (5)

Put a little seed into the ground,

Watch it grow the whole year round.



i) What does the poet ask to put in the ground?

ii) Write the rhyming words of 'Ground'?

iii) Write the past form of watch?

प्रतिदर्श प्रश्न पत्र - 2024-25

नाम : _____ अनुक्रमांक : _____ वर्ग : _____
खंड(क)

1. नीचे दिए गए गद्यांश को पढ़कर प्रश्नों के उत्तर दीजिए-

5

एक बार की बात है जंगल में एक बहुत ही होशियार खरगोश का बच्चा रहता था। उसका नाम बन्नी था। बन्नी को खोजबीन करना और नए दोस्त बनाना पसंद था। एक दिन धूप के समय बन्नी घूमते-घूमते जंगल के दूसरी ओर पहुँचा। वहाँ उसे सैम नाम की गिलहरी मिली। सैम बहुत ही मिलनसार थी। जल्दी ही दोनों में दोस्ती हो गई। वे पूरी दोपहर खिलखिलाते हुए लुका-छिपी खेलते रहे। अचानक, उन्हें एक हल्की-सी फुसफुसाहट सुनाई दी। दोनों ने पास जाकर देखा तो एक छोटा और प्यारा चिड़िया का बच्चा दिखाई दिया। सैम ने उसका नाम पूछा। उसका नाम बेला था। बेला अपने माँ-बाबा से बिछड़ गई थी। सैम और बन्नी ने बेला को उसके घर तक सही-

सलामत पहुँचा दिया। बेला की माँ ने बन्नी और सैम को धन्यवाद दिया और उनके लिए बहुत ही स्वादिष्ट पकवान बनाये। सैम, बन्नी और बेला ने मिलाकर खूब खाया और मिलाकर बहुत मस्ती की। इस प्रकार बेला, सैम और बन्नी की एक अच्छी दोस्त बन गई।

प्रश्न 1. कहानी में खरगोश का नाम क्या है?

उत्तर _____

प्रश्न 2. बन्नी खरगोश को क्या करना पसंद है?

उत्तर _____

प्रश्न 3. कहानी में खरगोश के दोस्तों के क्या नाम हैं?

उत्तर _____

प्रश्न 4. खरगोश की दोस्त कौन थी?

उत्तर _____

प्रश्न 5. चिड़िया के बच्चे का नाम क्या था?

उत्तर _____

2. सही विकल्प पर सही (✓) का निशान लगाओ-

5

क) वर्ष का पहला महीना होता है?

i) फरवरी () ii) मार्च () iii) जनवरी ()

ख) जो इलाज करता हो।

i) सुनार () ii) दर्ज़ी () iii) डॉक्टर ()

ग) फूल का विलोम होता है?

i) काली () ii) पत्ते () iii) कांटा ()

घ) घर का पर्यायवाची है।

i) गृह () ii) आवास () iii) सदन ()

ड) जो फल बेचता हो।

i) फलवाला () ii) बढई () iii) रसोईया ()

3. निम्न शब्दों के विलोम शब्द लिखो-

क) लाभ _____ ख) रोना _____ ग) अपना _____ घ) अमीर _____ ड) वीर _____
च) सफ़ेद _____

3

4. सही पर्यायवाची शब्द से वाक्य पूरे करो-

क. फूल को हम _____ भी कहते हैं।

ख. शिशु, बालक _____ के समानार्थी हैं।

ग. नेत्र, नयन, लोचन _____ के पर्यायवाची हैं।

घ. घोड़े को _____ भी कहते हैं।

ड. सूर्य को हम _____ नाम से भी बुलाते हैं।

5

5. नीचे दिए वाक्यांश के लिए एक शब्द लिखो-

क) जो सब्जी बेचता हो। _____

ख) जो कपड़े धोता हो। _____

ग) जो लकड़ी का सामान बनाता हो। _____

घ) जो कपड़े सिलता हो। _____

ड) जो गहनें बनाता हो। _____

5

6. निम्नलिखित प्रश्नों के उत्तर दीजिए-

क) वर्ष में कितने महीने होते हैं?

उत्तर _____

ख) सोमवार के बाद कौन सा वार आता है?

उत्तर _____

2

7. नीचे दिए चित्र को देखकर पाँच वाक्य लिखिए -

5



1. _____

2. _____

3. _____

4. _____

5. _____

खड़-(ख)

8. सही विकल्प पर सही (✓) का निशान लगाओ -

5

क) शेर कितने दिन से भूखा था?

i) दो दिन से () ii) आठ दिन से

ख) चिड़िया कैसा गीत सुनाती है ?

i) मीठा () ii) लंबा ()

ग) दादी जी ने सामान लाने के लिए क्या दिया?

i) थैले () ii) टोकरी ()

घ) चिड़िया अपना घोंसला कैसे बनाती हैं?

i) तिनको से () ii) ईंटों से ()

इ)शेरूदा कौन था ?

i)शेर () ii)चीता ()

9.निम्नलिखित शब्दों के अर्थ बताइए -

क)अस्त _____ ख)गीत। _____ ग)वर्षा _____
घ)सूची _____ इ)नुकसान _____

5

10.कविता की पंक्तियाँ पूरी करो -

सर्दी गर्मी वर्षा को भी

हंसकर _____ ।

आप खुशी से जीती है

_____ ।

2

11.शब्द चुनकर वाक्य पूरे करो -

फूल , लंबी , वसंत , बाढ़ , छोटी

क) बसंत ऋतु में _____ खिल जाते हैं।

ख)गर्मी में रातें _____ होती हैं।

ग)सर्दी के समाप्त होने पर _____ ऋतु आती है।

घ)अधिक बरसात होने पर _____ आ जाती है।

इ)सर्दी में रातें _____ होती है।

5

12.निम्नलिखित प्रश्नों के उत्तर संक्षेप में दीजिए।

क)राखी का त्यौहार कब मनाया जाता है?

उत्तर _____ ।

ख)शेर के पास सबसे पहले खाना कौन लाया?

उत्तर _____ ।

ग)आसमान में काले बादल देखकर कौन नाचता है?

उत्तर _____ ।

घ)चिड़िया सबको क्या सिखाती है?

उत्तर _____ ।

इ)दादाजी के साथ बच्चे कहाँ जा रहे थे?

उत्तर _____ ।

5

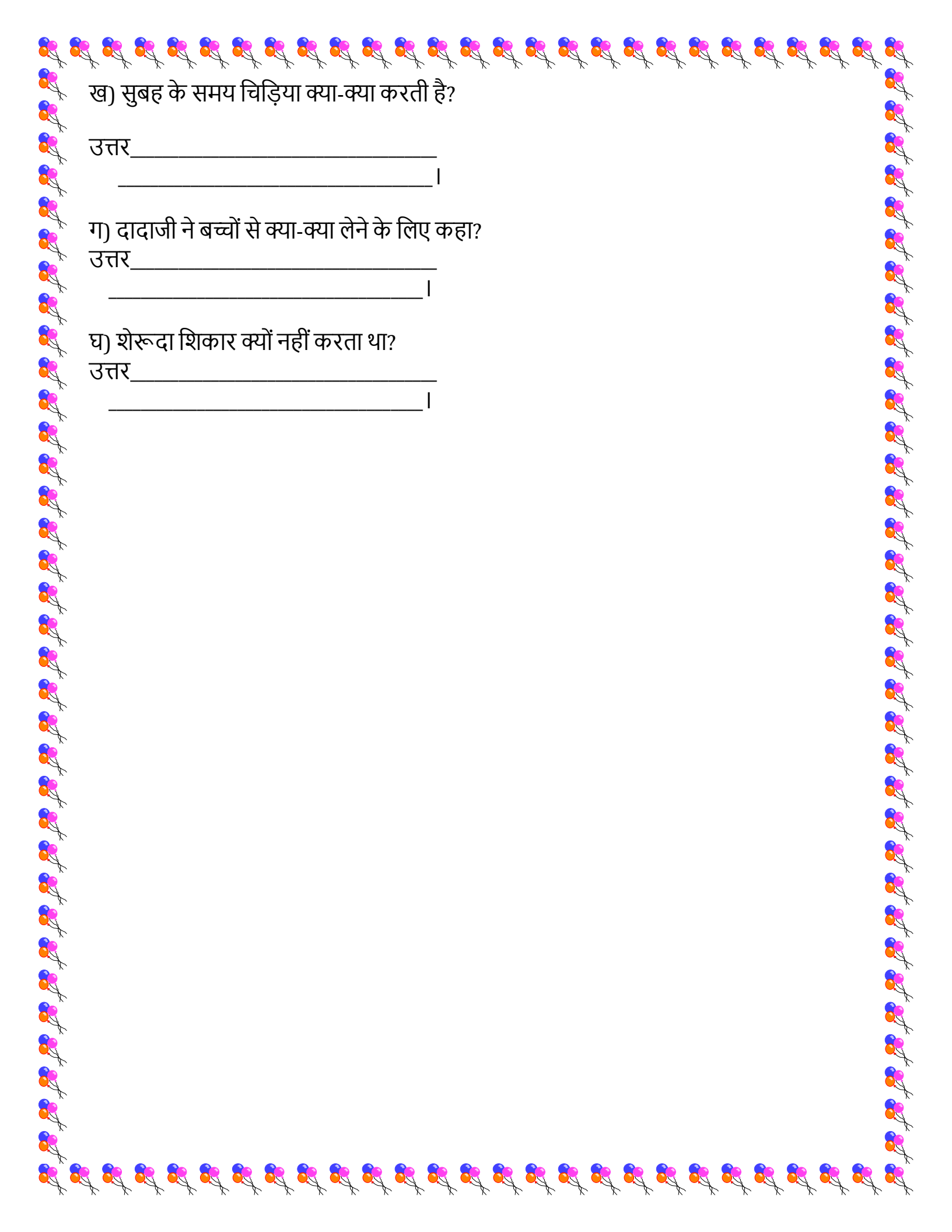
13.निम्नलिखित प्रश्नों के उत्तर एक वाक्य में दीजिए -

क) शेरूदा फल सब्जियाँ खाने को क्यों तैयार हो गया?

उत्तर _____

_____ ।

8



ख) सुबह के समय चिड़िया क्या-क्या करती है?

उत्तर _____
_____।

ग) दादाजी ने बच्चों से क्या-क्या लेने के लिए कहा?

उत्तर _____
_____।

घ) शेरूदा शिकार क्यों नहीं करता था?

उत्तर _____
_____।

SAMPLE PAPER
CLASS II
Maths

Time – 2 Hrs.

M.M.- 60

Name - _____

Roll No. - _____

Class & Sec. - _____

Date - _____

Section – A

(1X10=10)

Q1. Tick the right option-

(1) The short hand of the clock shows _____

(a) hours

(b) seconds

(c) minutes

(2) ₹1 = _____ P

(a) 35

(b) 100

(c) 120

(3) $15 \div 3 =$ _____

(a) 1

(b) 5

(c) 7

(4) An hour means _____ minutes.

(a) 30

(b) 50

(c) 60

(5) ₹100 + ₹50

(a) ₹150

(b) ₹155

(c) ₹160

(6) ₹5 + ₹2 =

(a) ₹6

(b) ₹7

(c) ₹8

(7) In a leap year, _____ has 29 days.

(a) February

(b) March

(c) April

(8) $9 \times 8 = \underline{\hspace{2cm}}$.

(a) 54

(b) 63

(c) 72

(9) $25 \text{ P} - 10 \text{ P} = \underline{\hspace{2cm}}$

(a) 10P

(b) 15P

(c) 20P

(10) 1 year = _____ months

(a) 7

(b) 10

(c) 12

Section - B

(2X19=38)

Q2. Add the following-

(a) 36 P

(b) ₹ 45

+ 47 P

+ ₹ 19

Q3. Subtract –


(a) 828 P

(b) ₹ 486

- 404 P

- ₹ 129

Q4. Write the time shown on each clock-



Q5. Divide using multiplication tables-

(a) $18 \div 2 =$ _____

(c) $27 \div 9 =$ _____

(b) $25 \div 5 =$ _____

(d) $24 \div 3 =$ _____

Q6. Divide the following by repeated subtraction-

(a) $12 \div 4$

$12 - 4 =$ _____

$8 - 4 =$ _____

$4 - 4 =$ _____

So, $12 \div 4 =$ _____

Q7. Twenty-eight students asked about their favourite sport-

Cricket-8

Hockey-5

Chess-6

Football-9

Shown this information using pictograph using your own picture symbol.

Cricket	
Hockey	
Chess	
Football	

Q8. Add the following amount-

(a) $\text{₹ } 50 + \text{₹ } 50 + \text{₹ } 2 = \text{₹}$ _____


(b) $\text{₹ } 10 + \text{₹ } 10 + \text{₹ } 20 = \text{₹}$ _____

Q9. Divide the following in equal groups-



(a) Divide the stars into 3 equal groups

$$\underline{\hspace{2cm}} \div \underline{\hspace{2cm}} = \underline{\hspace{2cm}}$$



(b) Divide the balls into 4 equal groups

$$\underline{\hspace{2cm}} \div \underline{\hspace{2cm}} = \underline{\hspace{2cm}}$$

Q10. Answer the following questions-

- (a) Which is the first day of the week? _____
- (b) Which day comes before Saturday? _____
- (c) Which day comes after Tuesday? _____
- (d) Which day comes between Wednesday and Friday? _____

Q11. Fill in the blanks-

- (a) $4 \times 8 =$ _____
- (b) $9 \times 2 =$ _____
- (c) $10 \times 5 =$ _____
- (d) $7 \times 3 =$ _____

Q12. Add the following-

(a) ₹ P

$$\begin{array}{r} 41.50 \\ + 28.54 \\ \hline \end{array}$$

(b) ₹ P

$$\begin{array}{r} 56.13 \\ + 24.20 \\ \hline \end{array}$$

Q13. Sumit bought one book costs ₹ 28.10 and one notebook costs ₹ 15.50. find their total cost.

Cost of a book = _____

Cost of notebook = _____

Total cost = _____

Q14. Write correct numbers in the blanks-

(a) 2 weeks = _____ days (7 / 14)

(b) 1 year = _____ days (365 / 366)

(c) 1 day = _____ hours (12 / 24)

(d) 1 fortnight = _____ days (30 / 15)

Q15. Draw hand to represent the time given below-

(a) 3 o' clock



(b) 09:30



Q16. Add and write the answer in blanks-

(a) ₹ 1 + ₹ 1 = ₹ _____

(b) ₹ 5 + ₹ 5 = ₹ _____

(c) ₹ 2 + ₹ 2 + ₹ 1 = ₹ _____

(d) ₹ 10 + ₹ 10 = ₹ _____

Q17. Rahul and his cousins weighed themselves and made the following weight chart-

<u>Name</u>	<u>Weight</u>
Raj	32Kg
Teen	28Kg
Rahul	40Kg
Anil	34Kg
Payal	28Kg

Using the table above, answer the following questions-

- (a) Who is the heaviest child? _____
(b) Who is the lightest child? _____
(c) Which two children weigh the same? _____ and _____.

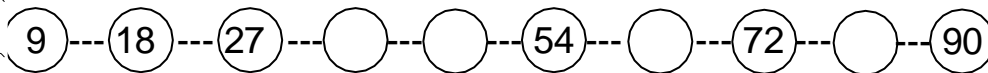
Q18. Write the money amount in words-

- (a) ₹70.05 _____
(b) ₹50.70 _____

Q19. Use the division facts to fill in the blanks-

- (a) $4 \div 4 =$ _____
(b) $0 \div 8 =$ _____
(c) $20 \div 20 =$ _____
(d) $9 \div 1 =$ _____

Q20. Complete the table of 9-



Section - C

(3X4=12)

Q21. Divide equally by forming groups-

- (a) 15 ice cream among 3 children
_____ ÷ _____ = _____

(b) 16 carrots among 8 rabbits

$$\underline{\hspace{2cm}} \div \underline{\hspace{2cm}} = \underline{\hspace{2cm}}$$

Q22. (a) On Holi, Sachin had ₹ 928 money. He spends ₹169 on sweets. How much money left with Sachin?

Total money = ₹	
Spent on sweets = ₹	
Money left = ₹	

Q23. Fill in the blanks-

- (a) First month of the year is _____.
- (b) June has _____ days.
- (c) If the last month was November, _____ will be the last month.

Q24. The following table shows different fruits liked by children in a school-

Fruits	Number of children
Mango	66
Apple	54
Orange	87
Banana	95

- a. Which fruit is liked the most? _____
- b. Which fruit is liked the least? _____
- c. Which fruit is liked more, mango or orange? _____

SAMPLE PAPER
CLASS II
EVS

Time:2Hrs

MM-60

Name _____

Section _____

Roll no. _____

Q1) Tick the correct option:

(1x10=10)

A) We do not get from plants ?

- 1) Paper
- 2) Plastic
- 3) Rubber

B) Which part of the plants prepare food?

- 1) Stem
- 2) Roots
- 3) Leaf

C) We get silk from?

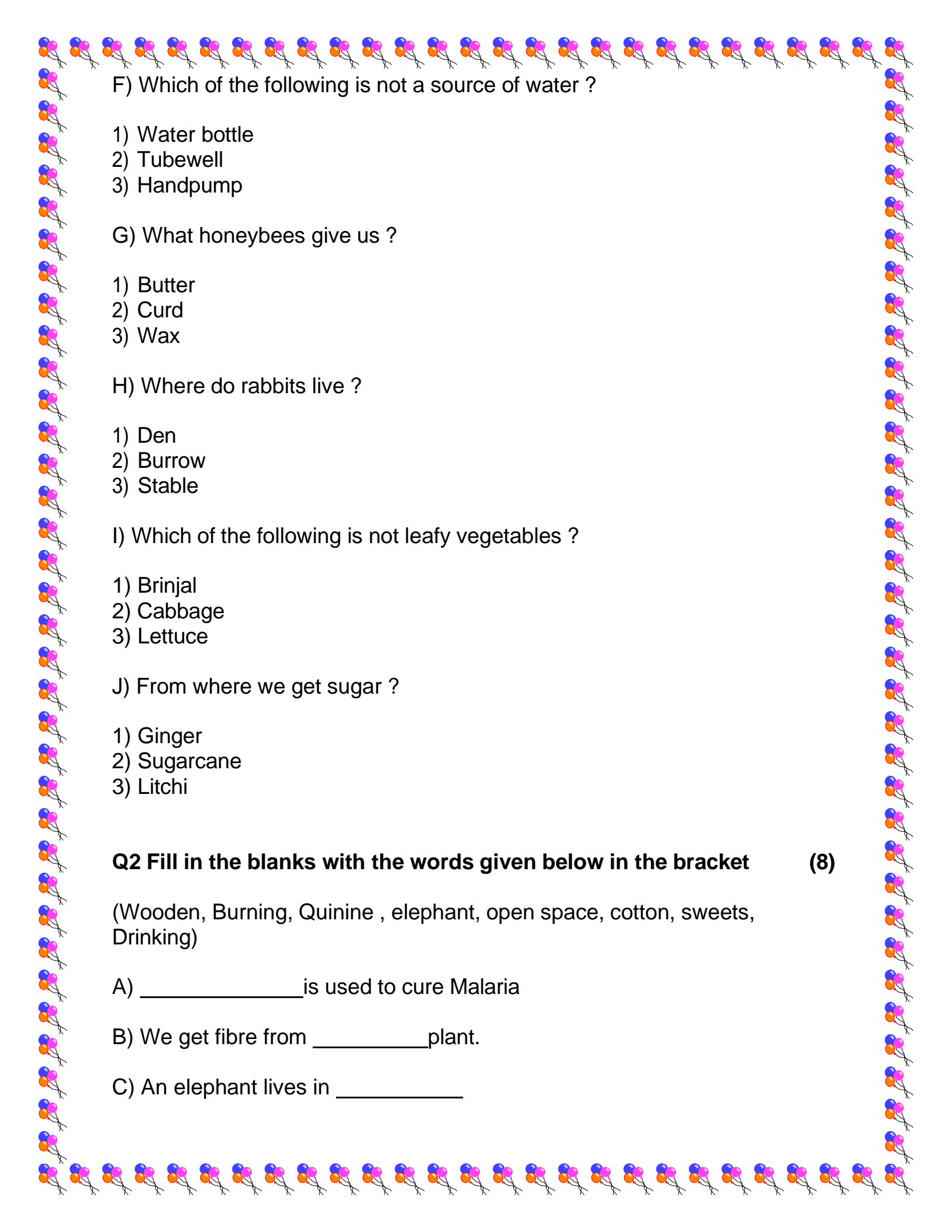
- 1) Silkworm
- 2) Honeybee
- 3) Bear

D) This animal lives in kennel ?

- 1) Dog
- 2) Bear
- 3) Elephant

E) Air has _____

- 1) Colour
- 2) Weight
- 3) Shape



F) Which of the following is not a source of water ?

- 1) Water bottle
- 2) Tubewell
- 3) Handpump

G) What honeybees give us ?

- 1) Butter
- 2) Curd
- 3) Wax

H) Where do rabbits live ?

- 1) Den
- 2) Burrow
- 3) Stable

I) Which of the following is not leafy vegetables ?

- 1) Brinjal
- 2) Cabbage
- 3) Lettuce

J) From where we get sugar ?

- 1) Ginger
- 2) Sugarcane
- 3) Litchi

Q2 Fill in the blanks with the words given below in the bracket (8)

(Wooden, Burning, Quinine , elephant, open space, cotton, sweets, Drinking)

A) _____ is used to cure Malaria

B) We get fibre from _____ plant.

C) An elephant lives in _____

D) We make _____ from milk.

E) We need water for _____

F) Air is needed for _____

G) Wool is used to make _____ Clothes.

H) _____ is the heaviest land animal on the earth.

Q3) Write True or False

(0.5 x 8 = 4)

A) Plants are the living beings _____

B) We use dogs to carry load _____

C) We make ghee from milk _____

D) Climbers and Creepers are not weak plants _____

E) The roots are the underground part of plant _____

F) We get leather from sheep _____

G) Ice cube is the solid form of water _____

H) Water helps to dry wet clothes _____

Q4) Look at the pictures and complete their names

(1x3 = 3)



A) R ____ N



B) O _____N



C) L _____U __D

Q5) Match the following (1x5 =5)

Column 1

- A) Water
- B) Leafy Vegetable
- C) Spice
- D) Fish
- E) Bird

Column 2

- Clove
- Putting out fire
- Aquarium
- Nest
- Cabbage

Q6) One word answers

(1x6 =6)

A) Very small plants having soft and green stems ?

B) Name a fruit that we eat ?

C) Name the largest bird in the world ?



D) What is the main source of water on the earth ?

E) Where does a deer live ?

F) Name two climbers ?

Q7) Answer in one line

(2x5 = 10)

A) What do we get from plant?

B) What are three forms of water ?

C) Name two animals that give us leather ?

D) What is a tree ?

E) Why do animals need shelter ?

Q8) Long question answers

(3x3 = 9)

A) How can we keep air and water clean ?

B) Write two features of air ?

C) What do we make by using leather ?

Q9) Draw and label parts of a plant ?

(2.5x2 = 5)

AND

Draw and label any items that we get from milk?