



Yuvashakti Model School

इतिहास और इकाइयों
Sector-III, Rohini, Delhi-I 10085

WINTER ASSIGNMENT

CLASS – V

2023 – 24

ENGLISH

□ Complete the following assignment on A-4 size sheets.

Q1. Express your feelings as 'Santa' that what changes you would like to bring in our country and how will you motivate the people.

Q2. Write an essay on the topic "Discipline".

Q3. Fill in the blanks with suitable personal pronouns:

1. We scored as many goals as _____. (they /them)
2. I am one year older than as _____. (they /them) 3. He is as good a student as. _____. (She/ her)
4. Between you and_____, (I/ me) he is a liar.
5. Ria and _____ (I / myself) went to Kerala. Q4. Change the

given statements into a question.

1. Rani is staying with her parents.
2. He has been preparing for his exam.
3. They got married last month.
4. Anu wants to be a writer.
5. Raju is doing his homework.
6. Sneha works at a bank.

Q5. Circle the subject and Underline the object in these sentences: 1)

She visits her parents at least once a month.

- 2) Ruby loves Pancakes.
- 3) The key is in the drawer.
- 4) The teacher is from Canada.
- 5) Maria has lost her money.
- 6) She is living in Toronto.
- 7) Salim has visited Paris.
- 8) George walks his dog twice a day.

Q6. Underline the Verbs and write whether they are transitive or intransitive: 1)

Could you move your car please?

- 2) Taylor was found guilty of starting the fire.

- 3) Kevin couldn't read or write.
 4) When the rain stopped, we went for a walk. 5) Have you washed your hands?

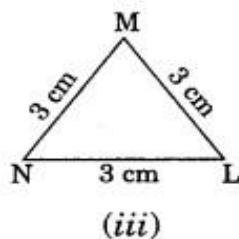
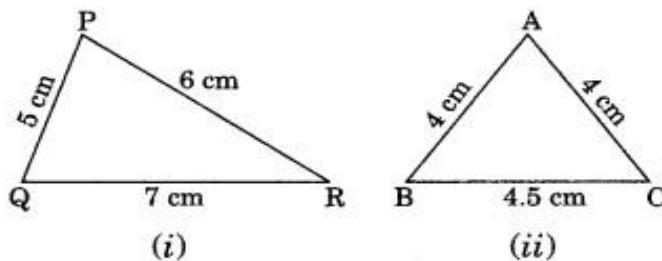
MATHEMATICS

Note- Kindly do all the work in a separate thin notebook.

Q1. Choose the correct option:

- a. What is the interest, if the amount is ₹ 1105 and principal is ₹ 800 ? i) 3005
 ii) 305 iii) 350 iv) 3050
- b.is the measure to check hotness or coldness of a body.
 i) Celsius ii) Fahrenheit iii) Temperature iv) Weather
- c. The scale is used in clinical thermometer.
 i) Celsius ii) Fahrenheit iii) Temperature iv) Kilogram
- d. Which instrument is used to measure temperature of a body?
 i) Richter's scale ii) Thermometer iii) Temperature iv) Machine
- e. Name a triangle whose all three sides are of equal length.
 i) Right angled triangle ii) Scalene iii) Isosceles iv) Equilateral
- f. A triangle has vertices,sides and angles.
 i) 3 ii) 2 iii) 4 iv) 5
- g. Name the longest chord of the circle.
 i) Radius ii) Arc iii) circumference iv) Diameter

Q2. Identify the following as scalene, isosceles and equilateral triangles.

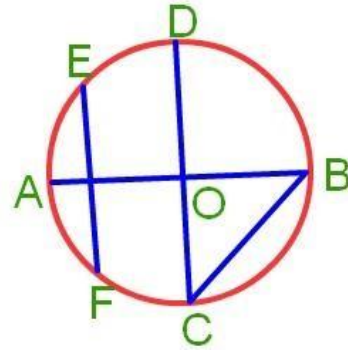


Q3 Find:

- a) the radius, if diameter is 12 cm.
- b) the diameter, if radius is 4.5 cm.

Q4. In the given figure name:

- i. Centre of the circle.*
- ii. All the radii.*
- iii. All the diameters.*
- iv. All the chords.*



Q5. A) With the help of a compass, draw a circle of radius

3 cm. B) Draw a circle whose diameter is 10 cm. Find its radius.

Q6) Find the perimeter of the triangle whose sides are:

- a) 12cm, 18cm, 40cm
- b) 3.5cm, 4.6cm, 1.2cm

Q7) Mr. Ram walks 6 rounds of a rectangular park whose length is 10 m and breadth is 15m. Find the total distance covered by him during his walk?

Q8) The length and breadth of a rectangular lawn are 14m and 7m respectively. Find the area of the lawn.

Q9) Find the dimensions of the rectangle:

- a) If area=800 cm² and breadth =25cm, find length.
- b) If area=104 m² and length= 8m find the breadth.

Q10) Ram bought the following items from Rajesh Pustak Stall on 7 august 2023. Prepare a bill for these items & Write 3 advantages of making BILL.

- 1) 2 Ramayana books at Rs.500 per piece
- 2) 1 Bible at Rs.750 per piece
- 3) 1 Quran at Rs.850 per piece
- 4) 1 Mahabharat at Rs.450 per piece

Q12) Convert the following temperatures

- a) In Fahrenheit scale: A) 40° C B) 85 ° C
- b) In Celsius scale: A) 212 ° F B) 113 ° F

SOCIAL SCIENCE

NAME - _____

SECTION - _____

NOTE: - Take the printout of this assignment and complete it.

Q1. Choose the correct option.

- a) Name the party founded by Subhash Chandra Bose
 - 1) HRA
 - 2) Forward bloc
 - 3) INC
- b) Why was INC formed?
 - 1) To form an Indian army
 - 2) To unite the Indians
 - 3) To fight against the British
- c) Who among the following was considered an extremist.
 - 1) Lala Lajpat Rai
 - 2) Dada Bhai Naoroji
 - 3) Gopal Krishna Gokhale
- d) When was Gandhiji born?
 - 1) 2 October 1969
 - 2) 2 October 1852
 - 3) 2 October 1869
- e) Our constitution was drafted by
 - 1) Dr. Rajendra Prasad
 - 2) Pandit Jawaharlal Nehru
 - 3) Dr. B R. Ambedkar

Q-2. Answer in short.

a) When was the East India Company formed?

_____ b)

Who claimed 'India for the Indians'?

c) Who founded Indian National Congress?

d) When was constitution of India came into force?

e) Who was the first President of free India?

Q- 3. Fill in the blanks.

- a) Lord _____ partitioned Bengal.
- b) Indians were inspired by songs and poems written by _____.
- c) _____ led the protest against Simon Commission.
- d) The Rowlatt Act was also known as the _____.
- e) The _____ insisted on a separate Country for the Muslims.

Q- 4. Write 'True' or 'False'.

- a) Indian accepted the partition of Bengal happily. _____
- b) Savitri Phule wanted reforms against sati. _____
- c) Gandhiji began the Non-cooperation Movement in 1921. _____
- d) We can enjoy rights without duties. _____
- e) Pandita Ramabai wrote a book "High Caste Hindu Women". _____

Q-5. Answer these questions.

a) Why was Rowlett Act opposed by the Indians?

b)

Who was the revolutionaries?

c) What was the actual reason for the partition of Bengal?

d) What reforms did Raja Ram Mohan Roy want to bring about?

Q- 6 What are the important events of freedom struggle of India.

Q- 7. Why was India partitioned?

SCIENCE

NAME - _____

SECTION - _____

NOTE: - Take the printout of this assignment and complete it.

Q.1 Tick the correct option

a) Which one is an opaque object?

i. Steel

ii. Water

iii. Plastic sheet

b) Which one is a renewable source of energy?

i. Water

ii. Coal

iii. Petroleum

c) Which one of the following is a consumer?

i. Grass

ii. Goat

iii. Bacterium

Q.2 Fill in the blanks

a) The beating of drums makes a _____ sound.

b) Moving objects possess _____ energy.

c) Objects that allow lights to pass through them completely are called _____.

Q.3 Give one-word answer.

a) Energy produced from breaking or joining atoms _____.

b) Loud and unpleasant sound is called _____.

c) Animals eat only flesh of other animal _____.

Q.4 State whether the given statements are true / false.

f) Work can be done with intelligence _____

g) Translucent objects allow light to pass through them partially _____

h) Pleasant sound makes us uncomfortable _____

Q.5 Answer the following question

a) How is shadow formed?

b) What are warning sounds? Give two examples.

c) Why are scavengers called the sweepers of the environment?

Q.6 Draw the following diagrams

- a. Lunar and Solar eclipse
- b. A simple food chain
- c. Any 2 examples of opaque object

विषय हिंदी

प्रश्न 1. निम्नलिखित प्रश्नों के उत्तर एक शब्द में दीजिए ।

1. स्वतंत्रता आंदोलन के दौरान सावरकर किससे अत्यधिक प्रभावित थे ?
2. साधु छोटू को कहाँ लेकर गए ?
3. छोटू अपनी परेशानियों का हल पाने के लिए किसके पास गया?
4. दिल्ली के लाल किले में किस बादशाह का दरबार लगा था?
5. 1905 में विदेशी वस्त्रों की होली कहाँ जलाई गई ?

प्रश्न 2. निम्नलिखित प्रश्नों के उत्तर दीजिए ।

1. सावरकर का जन्म कब और कहाँ हुआ ?
2. सावरकर ने किन दो संस्थाओं की स्थापना की ?
3. सावरकर किन गुणों के प्रतीक थे ?
4. नदी किनारे जाकर साधु और छोटू क्या कर रहे थे ?
5. बादशाह ने महाराज यशवंत सिंह को लक्ष्य करते हुए क्या व्यंग्य कसा ?
6. सब लोग कौन-सा दृश्य देखकर मंत्रमुग्ध रह गए ?

प्रश्न 3 निम्न शब्दों के शब्दार्थ कीजिए ।

1. चेतना
2. शौर्य
3. आश्चर्यचकित
4. प्रयास

प्रश्न 4. क्रिया किसे कहते हैं ?

प्रश्न 5. काल किसे कहते हैं ?

प्रश्न 6. काल के कितने भेद होते हैं? उनके नाम बताइए।

प्रश्न 7. निम्नलिखित शब्दों के विलोम शब्द लिखिए।

1. अनुज
2. अमीर
3. अस्त
4. आकर्षण
5. आशा

प्रश्न 8. मेरा विद्यालय विषय पर अनुच्छेद लिखिए ।

नोट - लिपि लेखन पृष्ठ 26 से 40 तक सुंदर व स्पष्ट शब्दों में लिखिए।

उपरोक्त प्रश्न- उत्तर अपने अभ्यास पुस्तिका में कीजिए और याद भी कीजिए ।

FRENCH

Instructions: You have to do this homework in your French notebooks

Q1) le verb 'aller'

- a) je _____ à la boulangerie
- b) vous _____ au cinema
- c) elle _____ en espagne
- d) je _____ à l' ecole

Q2) le verb 'avoir'

- a) tu _____ un stylo
- b) elle _____ trois hamters
- c) elles _____ chiens
- d) J' _____ une trousse rouge

Q3) Écrivez les nombres ordinaux (Write the ordinal numbers)

- 1st - _____
- 12th - _____
- 19th - _____
- 7th - _____
- 20th - _____
- 10th - _____
- 9th - _____

Q4) écrire le sens en anglais (Write meaning in english)

- a) grand-mère

- b) grand - père
- c) cuisiner
- d) étudiant

संस्कृत

1. 'नम्' और 'हस्' धातु लट् लकार रूप लिखिए।
2. ' लता' शब्द रूप याद करके लिखिए।
3. 1- 20 तक संख्यावाची शब्द लिखिए।
4. मंजूषा से शब्द छांटकर पुरुष और वचन के अनुसार लिखिए।(त्वम्, अहम् , सः, ते, युवाम्, आवाम्, तौ, यूयम् , वयम्)
- 5- पाठ 10 और 11 के सभी अभ्यास प्रश्न लिखकर अभ्यास कीजिए।